

Name: _____

Week of 9/6 - 9/13

Due Date: 9/13/2019



**For students to receive credit, parents must initial in each box.*

4th Grade Homework Howler

Choose a total of 5 boxes. At least 1 must come from Math, ELA, and Science.

Homework is given on Friday and is due the following Friday.

Math	ELA/Writing	Science/SS	Moral Focus
<p>Complete the worksheet on the back of this howler. If you work out problems on another sheet, please turn that in too. Have a parent check your answers! :)</p> <div style="border: 1px solid black; width: 60px; height: 40px; margin-left: auto; margin-right: auto;"></div>	<p>Read: The Champion of Quiet on CommonLit on Google Classroom. Answer the questions and submit.</p> <p>Parent initials required.</p> <div style="border: 1px solid black; width: 60px; height: 40px; margin-left: auto; margin-right: auto;"></div>	<p>Research how hurricanes form and write a short paragraph explaining the process.</p> <div style="border: 1px solid black; width: 60px; height: 40px; margin-left: auto; margin-right: auto;"></div>	<p>Make a Venn diagram comparing and contrasting the different ways you show wisdom at HOME and at SCHOOL. You need at least 3 examples per section.</p> <div style="border: 1px solid black; width: 60px; height: 40px; margin-left: auto; margin-right: auto;"></div>
<p>1st/2nd Period Students: Name the place value that is underlined and round to that place value. 1.) <u>34,483</u> 2.) <u>3,499</u> 3.) <u>482,394</u> 4.) <u>738,392</u> 5.) <u>19,890</u> 6.) <u>12,982</u></p> <p>MUM Students: Name the place value that is underlined and round to that place value. 1.) <u>83,294</u> 2.) <u>382.38</u> 3.) <u>73.09</u> 4.) <u>39,291.008</u> 5.) <u>0.932</u> 6.) <u>8.083</u></p> <div style="border: 1px solid black; width: 60px; height: 40px; margin-left: auto; margin-right: auto;"></div> <p>*Number each question</p>	<p>Complete the Antonyms Attract and Spinning Synonyms worksheet attached to this Homework Howler. ***You will use the same words as last week!</p> <div style="border: 1px solid black; width: 60px; height: 40px; margin-left: auto; margin-right: auto;"></div>	<p>Look at this anchor chart. Design your own anchor chart to help remember the acronym of what a graph needs.</p> <div style="text-align: center;"> <p>Graph with TAILS</p> </div> <div style="border: 1px solid black; width: 60px; height: 40px; margin-left: auto; margin-right: auto;"></div>	<p>How does this quote relate to wisdom?</p> <p><i>'Great people are those who make others feel that they, too, can become great'. - Mark Twain</i></p> <div style="border: 1px solid black; width: 60px; height: 40px; margin-left: auto; margin-right: auto;"></div>
<p>Log in to MOBY MAX at least THREE TIMES this week at home for at least 20 minutes. You may only do the MATH lessons. Games do not count as Moby Max Math time! Have a parent sign saying you did at least 3 days of Moby Max. Remember to have paper and pencil out to complete the lessons & assignments.</p> <div style="border: 1px solid black; width: 60px; height: 40px; margin-left: auto; margin-right: auto;"></div>	<p>Read: The Tale of Peter Rabbit on CommonLit on Google Classroom. Complete all questions and submit for credit.</p> <p>Parent signature required.</p> <div style="border: 1px solid black; width: 60px; height: 40px; margin-left: auto; margin-right: auto;"></div>	<p>Gather some data on your toys then create a graph to organize your findings. Remember to include all the parts a graph needs.</p> <div style="border: 1px solid black; width: 60px; height: 40px; margin-left: auto; margin-right: auto;"></div>	<p>Write about a person that you KNOW who you feel shows wisdom all of the time. Write at least one paragraph about this person give examples on how the demonstrate wisdom. Remember, sentences must be complete and start with capital letters.</p> <div style="border: 1px solid black; width: 60px; height: 40px; margin-left: auto; margin-right: auto;"></div>

***WFCA students will use their agenda to plan out their homework for the week using the howler. Please sign your student's agenda every Monday night to help them set weekly academic goals and to confirm you have checked the agenda for school communication*

Remembering1st / 2nd Period

What is 362,584 rounded to the nearest:

1. hundred? _____

2. thousand? _____

3. ten thousand? _____

4. hundred thousand? _____

Use any method to add.

$$\begin{array}{r} 5. \quad 2,938 \\ + 4,271 \\ \hline \end{array}$$

$$\begin{array}{r} 6. \quad 8,305 \\ + 1,467 \\ \hline \end{array}$$

$$\begin{array}{r} 7. \quad 8,074 \\ + 3,552 \\ \hline \end{array}$$

Copy each exercise, lining up the places correctly. Then add.

8. $45,296 + 38,302$

9. $293,017 + 58,226$

10. **Stretch Your Thinking** Luanne estimates the sum of $39 + 15$ is about $40 + 15$, or 55. Jacob estimates the sum of $39 + 15$ is about $40 + 20$, or 60. Which estimate is closer to the exact sum? Explain.

Homework**MUM**

The chart at the right shows the time each member of a relay team ran during a race.

Use the data to answer each question.

Jack	47.51 sec
Dusty	47.49 sec
Brandon	47.6 sec
Raj	47.57 sec

- How much longer did Jack run than Dusty?

- How much time did it take Brandon and Raj to complete their two legs of the race combined?

- Which two runners had the greatest difference in their running times? What is the difference?

Copy each exercise. Then add or subtract.

4. $0.9 + 0.06 =$ _____

5. $0.47 + 0.25 =$ _____

6. $0.56 + 0.91 =$ _____

7. $1.4 - 0.9 =$ _____

8. $5 - 1.5 =$ _____

9. $3.7 - 2.49 =$ _____

10. $0.08 + 0.6 =$ _____

11. $0.48 + 0.39 =$ _____

12. $19 + 1.04 =$ _____

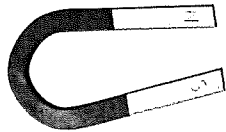
13. $3 - 0.05 =$ _____

14. $4.09 - 0.2 =$ _____

15. $6.07 - 4 =$ _____

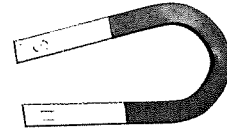
Antonyms Attract

Draw lines to match each word with its **antonym**.



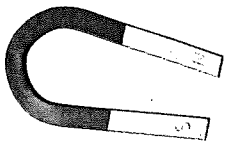
abandon

stay still



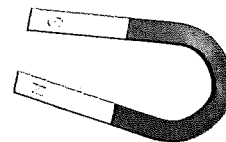
ability

clarify



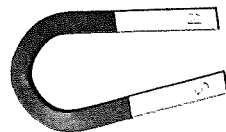
abroad

home



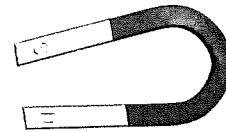
agreeable

cranky



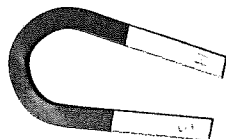
brief

long



budge

inconvenient

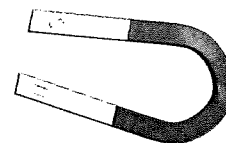


confuse

boredom

convenient

go up



curiosity

stay

descend

inability

Describe something you do every day that is **convenient**:

Do you shop at a certain store? Go to a certain bus stop?

Know a shortcut home?

Now describe something you have to do that is **inconvenient**.

Spinning Synonyms

Each bike wheel has a word missing. Read all the **synonyms** in each wheel. (You don't need to know the meaning of each one to complete the wheel.)

Find the word from the box that fits. Write it in the space.

Word Box

abandon	abroad	brief	convenient
ability	agreeable	confuse	curious

